




COMPUTER WORKSHEET

GRADE: I

NAME: _____ ROLL NO: _____

I Find out how many of these keys are there in the keyboard given below:

- 1) Enter keys _____
- 2) Alphabet keys _____
- 3) Number keys _____
- 4) Spacebar _____
- 5) Backspace _____
- 6) Caps Lock _____



II Fill in the blanks with the following words:

Tickets Fee Records Music Computers Letters Games

- a. Computers are used in schools for keeping _____.
- b. _____ help in drawing pictures.
- c. We can play _____ with the help of a computer.
- d. Computers are used in Railway stations for booking _____.
- e. We can write _____ with the help of a computer.
- f. We can listen to _____ on a computer.

III

Can the computer do the work of these devices? Write 'yes' or 'no' in the box.

a.



b.



c.




d.



e.



f.



g.



h.



IV

How is a computer different from you? Write 'Yes' or 'No' against these questions:

a. Can you move?

Can a computer move?

b. Can you remember things?

Can a computer remember things?

c. Do you forget things?

Does a computer forget things?

d. Can you do sums very quickly?

Can a computer do sums very quickly?

V

Mark the pictures with a tick mark where we use computers and with a "X" mark where we do not.



VI Say whether the following statements are true or false:

- a. Computers are used by the Police Department.
- b. A computer is a useless machine.
- c. Computers are not used in the Airports.
- d. Computers store a lot of information.
- e. Computers help in drawing cartoons.
- f. Computers make our work harder.

VII Tick the activities that a computer can help us in doing. Mark other activities with an X.

- a.

- b.

- c.

- d.

- e.

- f.


VIII Identify the parts of computer and write their names:

1. What finger is placed on the left mouse button? _____
2. What finger is placed on the right mouse button? _____
3. Where do we fix the tail of the mouse? _____
4. What do we call the small arrow moving on the monitor? _____
5. Write any two uses of mouse. _____

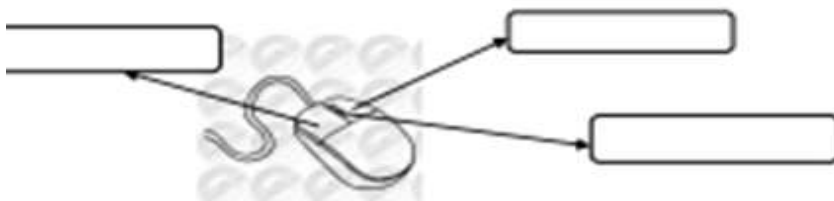
IX Fill in the blanks using the hints given in the box:

1. _____ clicking opens the item.
2. _____ clicking selects the item.
3. 'Click' means pressing the _____ button on the mouse.
4. The mouse is kept on a _____.
5. The small arrow which we see on the monitor is called _____.

Hints:

1. Left
2. Double
3. Mouse Pad
4. Mouse Pointer
5. Single

X Label the parts of mouse given in the following figure:



XI Here are some places where computers are used. Find them all!

Hint: Bank, Hospital, School, Airport

S	F	Q	E	M	B	M	H
C	G	A	U	Y	I	R	O
H	N	B	A	N	K	T	S
O	M	C	B	Q	P	N	P
O	U	S	J	S	C	U	I
L	C	Z	M	W	Z	L	T
A	X	V	N	R	V	S	A
A	I	R	P	O	R	T	L

XII Label and colour the parts of the Computer.

