



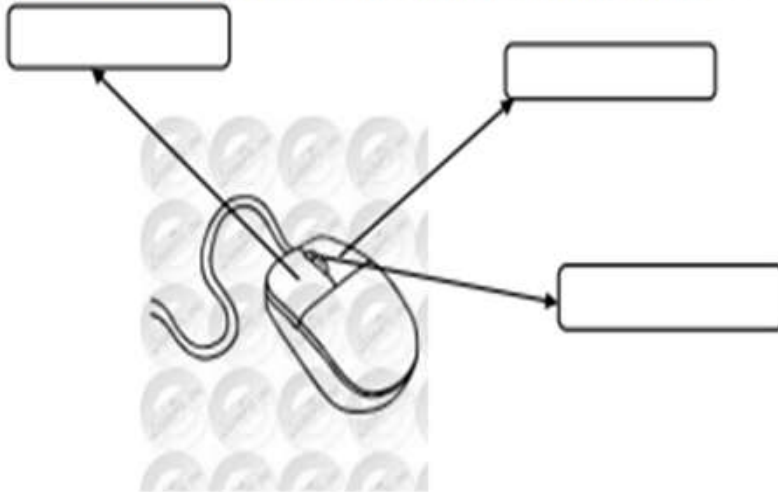
COMPUTER WORKSHEET

GRADE: II

NAME: _____ ROLL NO: _____

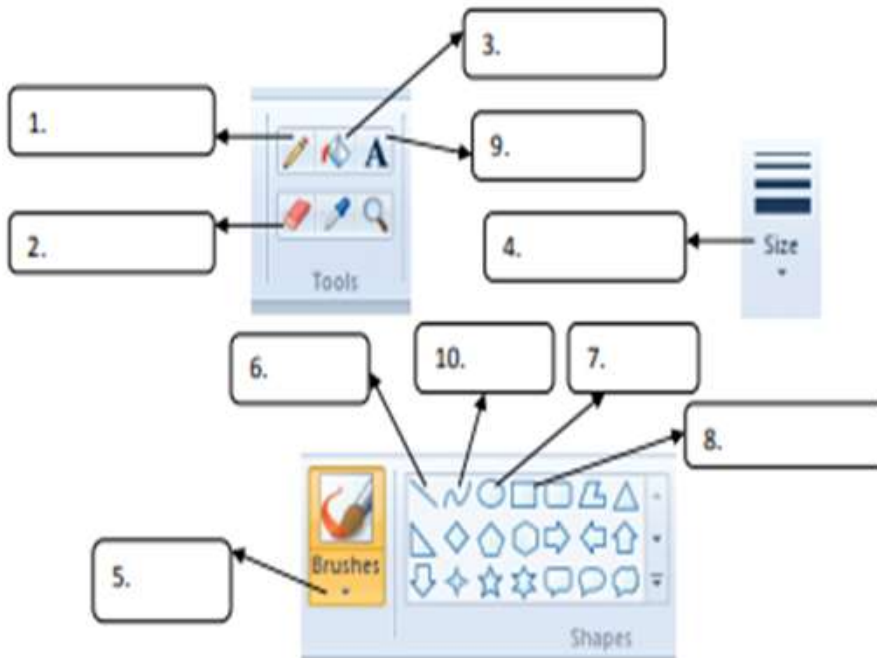
I

Label the parts of mouse given in the following figure:



II

Choose the correct answers from the hints given and write in front of the picture :



- Hints:**
- 1. Fill with color tool
 - 2. Pencil tool
 - 3. Oval tool
 - 4. Eraser tool
 - 5. Size tool
 - 6. Line tool
 - 7. Rectangle tool
 - 8. Brush tool
 - 9. Curve tool
 - 10. Text tool

III

Tick (✓) the activities which you feel can be done on a computer:

- | | | | |
|---------------------------------------|---------------------------------------|--|--------------------------------------|
| Draw <input type="checkbox"/> | Type letters <input type="checkbox"/> | Play music <input type="checkbox"/> | Play games <input type="checkbox"/> |
| Swim <input type="checkbox"/> | Walk <input type="checkbox"/> | Solve sums <input type="checkbox"/> | Jump <input type="checkbox"/> |
| Book tickets <input type="checkbox"/> | Jog <input type="checkbox"/> | Store records <input type="checkbox"/> | Design cars <input type="checkbox"/> |

IV

Write two places where you have seen computers:

- (a) _____ (b) _____

Name the three types of computers:

- (a) _____ (b) _____ (c) _____

Write 'C' against the task that a computer can do better and 'M' that a man can do better manner:

- | | |
|---|---|
| (a) Works with more accuracy <input type="checkbox"/> | (d) Work very quickly <input type="checkbox"/> |
| (b) Can store the things for longer time <input type="checkbox"/> | (e) Can decide what to do <input type="checkbox"/> |
| (c) Can think what is right or wrong <input type="checkbox"/> | (f) Can work without getting tired <input type="checkbox"/> |

V

Write the names of the parts of computer given below:



VI

Practical based questions:

1. How many Enter keys are there on the keyboard? _____
2. Which key works like an eraser? _____
3. Which key is used to add blank spaces between the words? _____
4. Which key is used to type the letters in capital? _____
5. Which program is used to type letters and numbers? _____

VII

Pick the words from the box and fill in the blanks:

1. Man can take his own _____.
2. A computer is used for keeping _____ of all items.
3. A computer is used for designing _____.
4. A computer can be used to prepare _____ reports at hospitals.
5. A computer stores large amount of _____.
6. A _____ does not have any feelings.
7. A _____ computer is kept on desk.
8. A _____ is used to withdraw money.

Hints:

Computer
Medical
Information
Cars
ATM
Decisions
Records
Desktop

VIII

Write True/False:

1. We cannot draw pictures on a computer.
2. A computer always gives correct results.
3. Computers are used in offices for calculating marks.
4. Computers are used in shops for printing tickets.
5. Computers are used in hospitals for playing games.

IX

Answer in one word using the hints given in the box:

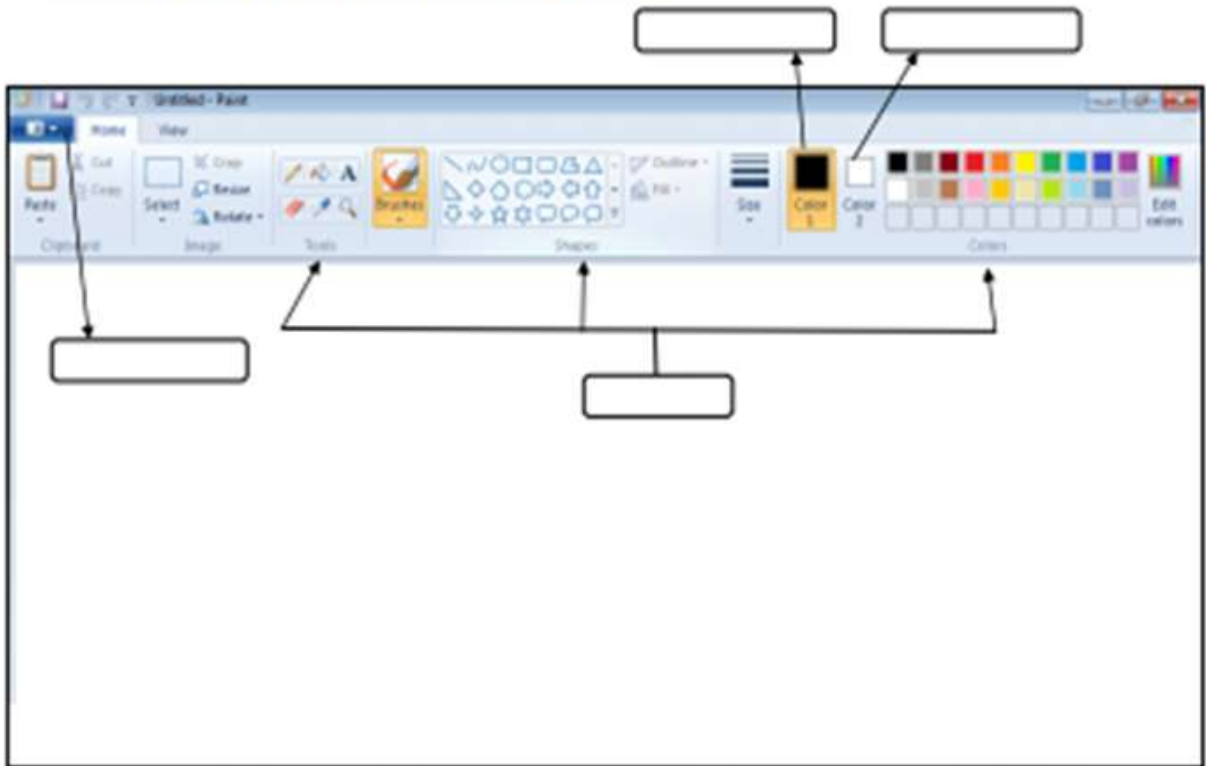
1. Which tool is used to fill colour in an object?
2. Which tool is used to draw rectangles and squares?
3. Which tool is used to draw circles?
4. Which tool is used to draw lines?
5. Which tool is used to erase the drawing?

Hints:


1. Fill with color tool
2. Oval tool
3. Eraser tool
4. Line tool
5. Rectangle tool

X

Label the parts of MS Paint window given below:

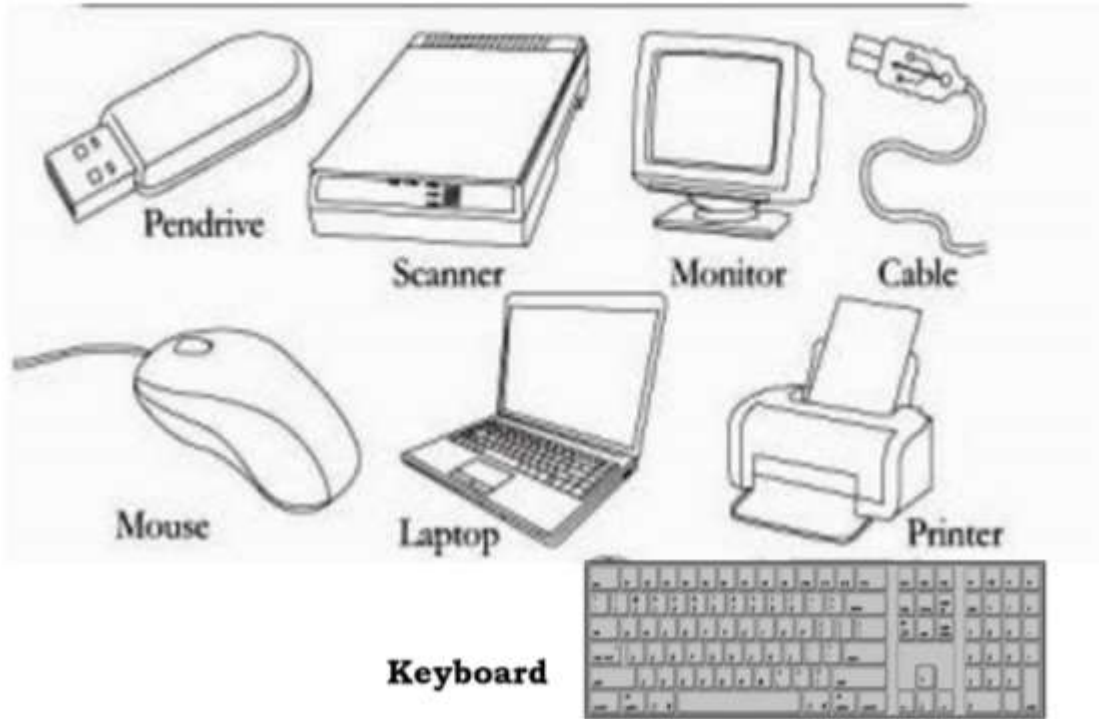


XI Draw the below given picture using different shape tools in Paint software and colour it.



Find the NAMES of these terms related to the computer system.

Colour each word with a DIFFERENT colour.



L	T	M	O	N	I	T	O	R	B	V	Q	K
Y	F	O	H	J	R	C	A	B	L	E	M	E
S	D	U	P	E	N	D	R	I	V	E	G	Y
O	M	S	C	A	N	N	E	R	T	I	H	B
F	I	E	V	U	L	Y	W	R	H	A	C	O
X	H	B	R	S	C	I	L	K	V	Z	X	A
D	J	L	A	P	T	O	P	T	E	U	F	R
F	I	W	T	Y	X	M	K	U	G	S	E	D