








MATHEMATICS WORKSHEET- GRADE I

DO THE FOLLOWING PROBLEMS. WRITE ANSWERS IN THE SPACE PROVIDED.

1)	$3 + 6$	
2)	Write down the next number: 8 9 10 11 12 ____	
3)	How many sides? 	
4)	$8 - 5$	
5)	Which number is missing from the number line? 	
6)	How many fish? 	
7)	What number comes after 26?	
8)	How much money? 	
9)	I have 10 bananas. I eat 3 of them. How many are left?	
10)	Sally has 5 cakes. She makes 2 more. How many does she have now?	
11)	Draw the next shape in the sequence. 	
12)	Which number comes before 18?	