







MATHEMATICS WORKSHEET- GRADE II

DO THE FOLLOWING PROBLEMS. WRITE ANSWERS IN THE SPACE PROVIDED.

- There are 6 glasses on one tray and 11 glasses on another tray. How many glasses are there altogether?
- 5 more than 90 is .
- Write in decreasing order.
9 5 2 8
, , ,
- How many days are there in two weeks?
- Double of 22 =
- $66 + 10 =$
- 30 cars are parked. 8 are gray, 4 are red and the remaining are blue. How many blue cars are there?
- $80 \div$ $= 10$
- 4, 14, 24,
- Complete this pattern.
 
- $373 =$ hundreds + tens + ones.
- 3 less than 99 is .
- Put the sign $>$ or $<$
 101 100
- If you can eat two icecreams each hour, how many icecreams will you finish in 2 hours?
 
- $25 \div 5 =$
-  How many wheels are there on 9 bicycles?
- Which month begins with F?
- Measure this line.
 cm
- How many benches are there in your classroom?
- $4 \times 40 =$